

英文姓名: _____

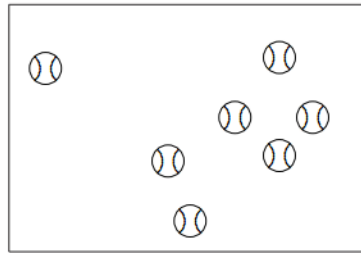
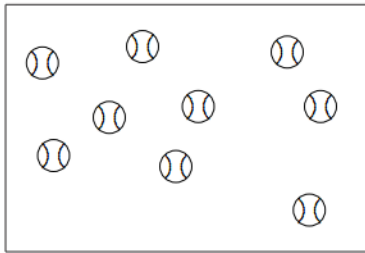
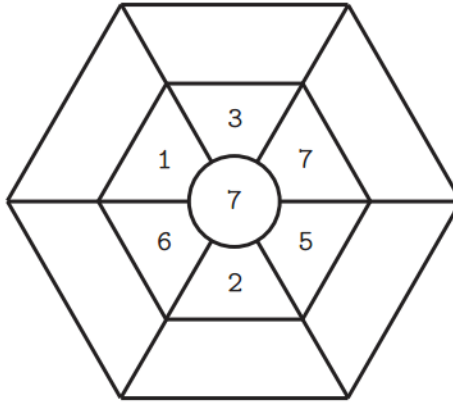
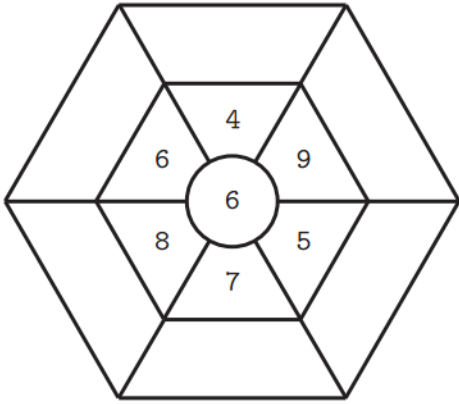
成績: _____

Fill in the blanks:

填入正确数字:

(+)

(-)



(a) $9 + 7 = (\quad)$

(c) $16 - 9 = (\quad)$

(b) $7 + 9 = (\quad)$

(d) $16 - 7 = (\quad)$

	7		6
-	1	+	1