





中文姓名: _____

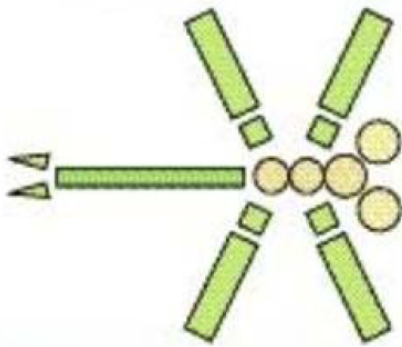
英文姓名: _____

成績: _____

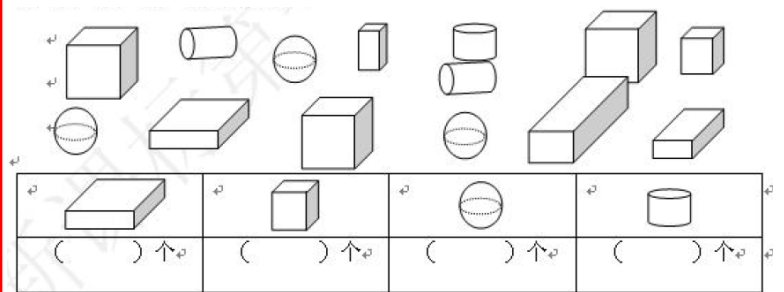
$\begin{array}{r} 23 \\ + 34 \\ \hline \end{array}$	$\begin{array}{r} 20 \\ + 33 \\ \hline \end{array}$	$\begin{array}{r} 20 \\ - 17 \\ \hline \end{array}$	$\begin{array}{r} 6 \\ + 23 \\ \hline \end{array}$	$\begin{array}{r} 28 \\ - 12 \\ \hline \end{array}$	$\begin{array}{r} 6 \\ + 47 \\ \hline \end{array}$	$\begin{array}{r} 49 \\ - 46 \\ \hline \end{array}$	
$\begin{array}{r} 8 \\ + 13 \\ + 6 \\ \hline \end{array}$	$\begin{array}{r} 3 \\ + 10 \\ + 17 \\ \hline \end{array}$	$\begin{array}{r} 18 \\ + 17 \\ + 5 \\ \hline \end{array}$	$\begin{array}{r} 16 \\ + 13 \\ + 18 \\ \hline \end{array}$	$\begin{array}{r} 13 \\ + 8 \\ + 17 \\ \hline \end{array}$	$\begin{array}{r} 9 \\ + 3 \\ + 6 \\ \hline \end{array}$	$\begin{array}{r} 17 \\ + 2 \\ + 7 \\ \hline \end{array}$	$\begin{array}{r} 6 \\ + 13 \\ + 8 \\ \hline \end{array}$
$\begin{array}{r} 20 \\ - 1 \\ - 2 \\ \hline \end{array}$	$\begin{array}{r} 15 \\ - 7 \\ - 7 \\ \hline \end{array}$	$\begin{array}{r} 18 \\ - 3 \\ - 3 \\ \hline \end{array}$	$\begin{array}{r} 12 \\ - 8 \\ - 2 \\ \hline \end{array}$	$\begin{array}{r} 20 \\ - 3 \\ - 1 \\ \hline \end{array}$	$\begin{array}{r} 19 \\ - 4 \\ - 7 \\ \hline \end{array}$	$\begin{array}{r} 18 \\ - 6 \\ - 4 \\ \hline \end{array}$	$\begin{array}{r} 9 \\ - 5 \\ - 1 \\ \hline \end{array}$

Count the amount of 2D shapes (e.g. circle, square, triangle, etc) and then fill the numbers inside the parenthesis.

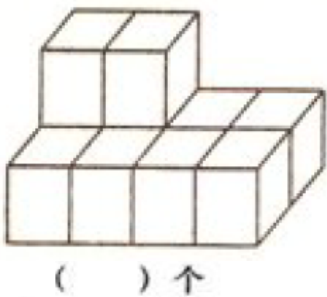
-  () 个
-  () 个
-  () 个
-  () 个



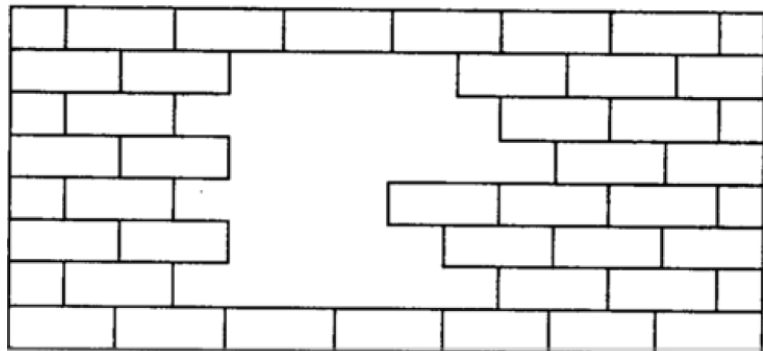
Count the amount of 3D shapes (e.g. cylinder, sphere, cube, etc) and then fill the numbers inside the parenthesis.



Count the number of cubes.



For each row, count the number of missing block. Write the numbers down from those 6 rows and then add them.



() + () + () + () + () + () = () 个