

中文姓名: _____

16-5

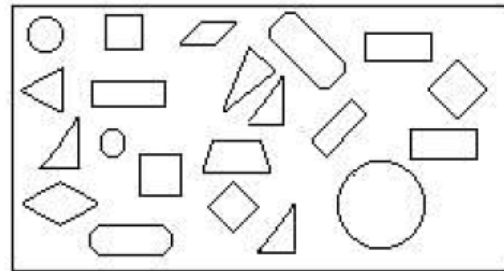

英文姓名: _____

成績: _____

| | | | | | | | |
|--|---|---|--|---|---|---|---|
| $\begin{array}{r} 45 \\ - 14 \end{array}$ | $\begin{array}{r} 15 \\ + 43 \end{array}$ | $\begin{array}{r} 5 \\ + 39 \end{array}$ | $\begin{array}{r} 15 \\ - 14 \end{array}$ | $\begin{array}{r} 38 \\ + 30 \end{array}$ | $\begin{array}{r} 49 \\ + 25 \end{array}$ | $\begin{array}{r} 46 \\ - 34 \end{array}$ | |
| | | | | | | | |
| $\begin{array}{r} 8 \\ + 18 \\ + 12 \end{array}$ | $\begin{array}{r} 8 \\ + 2 \\ + 9 \end{array}$ | $\begin{array}{r} 20 \\ + 7 \\ + 1 \end{array}$ | $\begin{array}{r} 4 \\ + 11 \\ + 9 \end{array}$ | $\begin{array}{r} 13 \\ + 4 \\ + 3 \end{array}$ | $\begin{array}{r} 8 \\ + 9 \\ + 14 \end{array}$ | $\begin{array}{r} 9 \\ + 9 \\ + 18 \end{array}$ | $\begin{array}{r} 4 \\ + 7 \\ + 17 \end{array}$ |
| | | | | | | | |
| $\begin{array}{r} 15 \\ - 6 \\ - 3 \end{array}$ | $\begin{array}{r} 13 \\ - 2 \\ - 6 \end{array}$ | $\begin{array}{r} 9 \\ - 5 \\ - 3 \end{array}$ | $\begin{array}{r} 19 \\ - 2 \\ - 11 \end{array}$ | $\begin{array}{r} 11 \\ - 4 \\ - 3 \end{array}$ | $\begin{array}{r} 19 \\ - 9 \\ - 6 \end{array}$ | $\begin{array}{r} 20 \\ - 3 \\ - 3 \end{array}$ | $\begin{array}{r} 20 \\ - 5 \\ - 8 \end{array}$ |
| | | | | | | | |

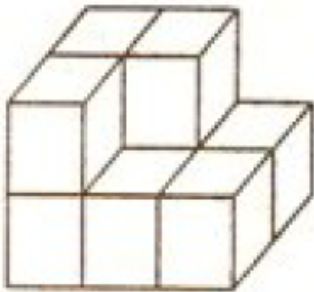
Count the amount of 2D shapes (e.g. circle, square, triangle, etc) and then fill the numbers inside the parenthesis.

○有()个
 □有()个
 △有()个
 ◻有()个



□有()个
 ◻有()个
 △有()个
 ○有()个

Count the number of cubes.



() 个

For each row, count the number of missing block. Write the numbers down from those 4 rows and then add them.



() + () + () + () = () 个